

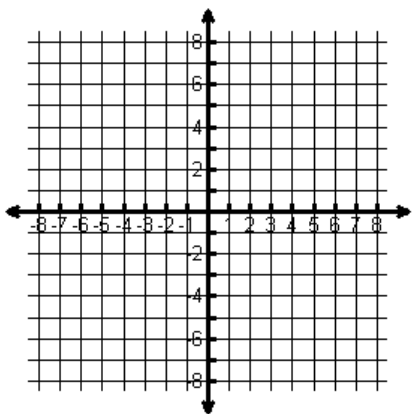
Name: _____

Date: _____

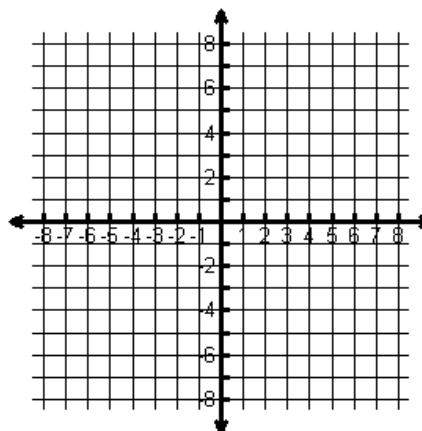
Graphing Linear Inequalities

Sketch the graph of each linear inequality.

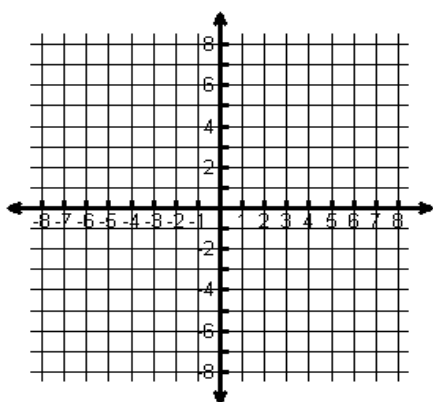
1) $y \geq -2x - 2$



2) $x \geq -4$



3) $5x - y > 5$
 $x + 3y \geq 3$



5) $2x - 5y < 10$
 $x - y \geq 0$

